

Maths

1. $\underline{\quad} + 5 = 6$

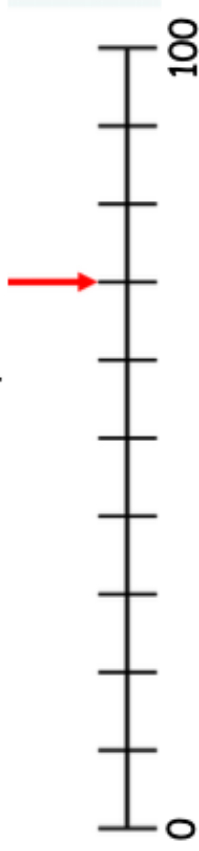
2. $4 + \underline{\quad} = 6$

3. $6 = 3 + \underline{\quad}$

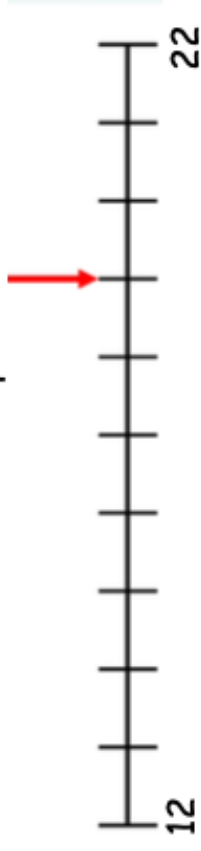
4. Fill in the missing numbers:



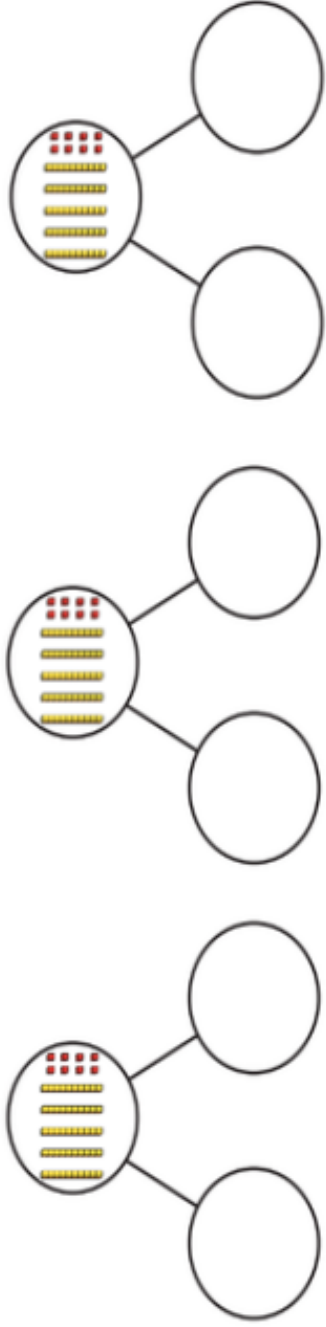
5. What number does the arrow point to?



6. What number does the arrow point to?



7. Complete the part, part, whole model in 3 different ways:



8. 34 can be partitioned into 30 and 4

9. 75 can be partitioned into 70 and 5

10. Can you fill in the missing numbers from the number line?

